

Centre No.						Paper Reference						Surname	Initial(s)	
Candidate No.						1	3	8	0	/	1	F	Signature	

Paper Reference(s)

1380/1F

Edexcel GCSE

Mathematics (Linear) – 1380

Paper 1 (Non-Calculator)

Foundation Tier



Tuesday 9 November 2010 – Morning

Time: 1 hour 30 minutes

Examiner's use only

--	--	--

Team Leader's use only

--	--	--

Materials required for examination

Ruler graduated in centimetres and millimetres, protractor, compasses, pen, HB pencil, eraser.
Tracing paper may be used.

Items included with question papers

Nil

Instructions to Candidates

In the boxes above, write your centre number, candidate number, your surname, initials and signature. Check that you have the correct question paper.

Answer ALL the questions. Write your answers in the spaces provided in this question paper.

You must NOT write on the formulae page.

Anything you write on the formulae page will gain NO credit.

If you need more space to complete your answer to any question, use additional answer sheets.

Information for Candidates

The marks for individual questions and the parts of questions are shown in round brackets: e.g. (2).

There are 31 questions in this question paper. The total mark for this paper is 100.

There are 28 pages in this question paper. Any blank pages are indicated.

Calculators must not be used.

Advice to Candidates

Show all stages in any calculations.

Work steadily through the paper. Do not spend too long on one question.

If you cannot answer a question, leave it and attempt the next one.

Return at the end to those you have left out.

This publication may be reproduced only in accordance with Edexcel Limited copyright policy.
©2010 Edexcel Limited.

Printer's Log. No.
N37831A

W850/R1380/57570 6/6/6/6



Turn over

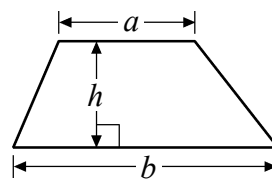
edexcel 
advancing learning, changing lives

GCSE Mathematics (Linear) 1380

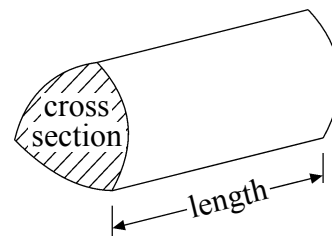
Formulae: Foundation Tier

**You must not write on this formulae page.
Anything you write on this formulae page will gain NO credit.**

Area of trapezium = $\frac{1}{2}(a+b)h$



Volume of prism = area of cross section \times length



Leave
blank

Answer ALL THIRTY ONE questions.

Write your answers in the spaces provided.

You must write down all stages in your working.

You must NOT use a calculator.

1. Lisa has 4 cards.
Each card has a number on it.

5

3

2

8

Lisa makes a number using all **four** cards.

- (a) Write down the smallest number Lisa can make.

--	--	--	--

(1)

- (b) Write down the largest number Lisa can make.

--	--	--	--

(1)

- (c) Write down an odd number Lisa can make.

--	--	--	--

(1)

(Total 3 marks)

Q1

3

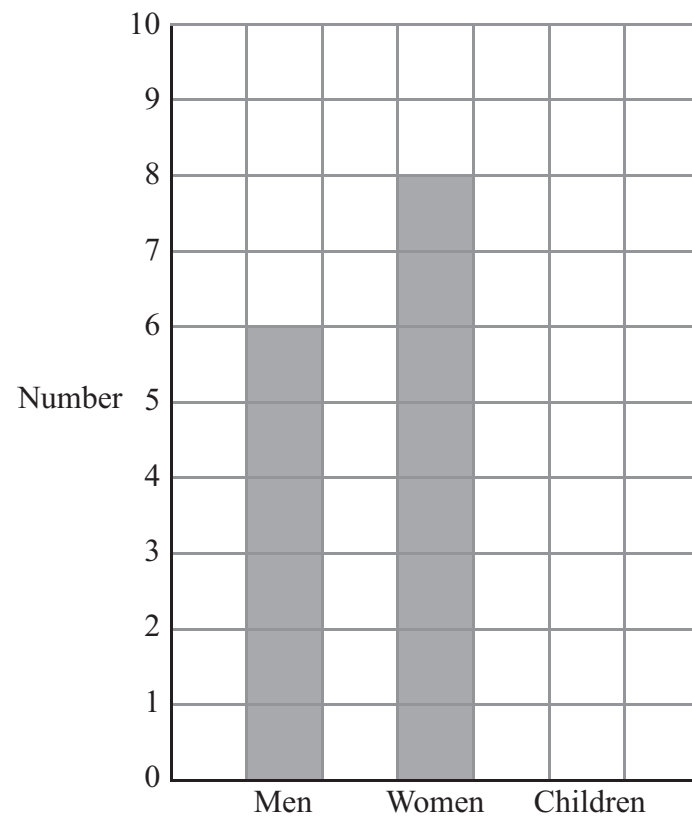
Turn over



N 3 7 8 3 1 A 0 3 2 8

Leave blank

2. The bar chart shows the numbers of men and women on a boat trip.



There were 5 children on the boat trip.

(a) Complete the bar chart.

(1)

(b) Work out the total number of men, women and children on the boat trip.

(2)

Q2

(Total 3 marks)



Leave
blank

3. (a) Write the number 4906 in words.

.....
(1)

(b) Write the number **ten thousand five hundred and forty eight** in figures.

.....
(1)

(c) Write the number 463 to the nearest ten.

.....
(1)

(d) Write the number 29 760 to the nearest thousand.

.....
(1)

(Total 4 marks)

Q3



Leave blank

4. The table shows some information about five students.

Name	Gender	Age	Number of brothers	Number of sisters
Angus	Male	15	2	2
Ben	Male	16	2	0
Clare	Female	16	0	1
Jane	Female	15	2	2
Pavel	Male	16	1	3

(a) How many sisters does Clare have?

.....
(1)

One male student has 2 brothers and 2 sisters.

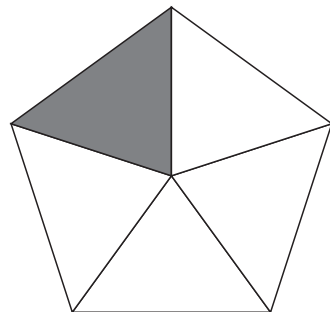
(b) Write down the name of this student.

.....
(1)

(Total 2 marks)

Q4

5. (a) Here is a regular pentagon.



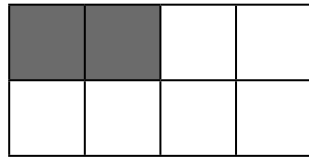
What fraction of the pentagon is shaded?

.....
(1)



Leave blank

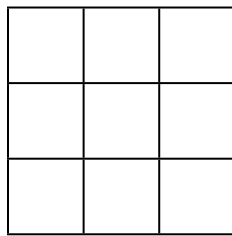
(b) Here is a shape.



What percentage of the shape is **not** shaded?

..... %
(1)

(c) Here is a different shape.



Shade $\frac{2}{3}$ of this shape.

(1)

(d) Here are some fractions.

$\frac{4}{6}$ $\frac{6}{10}$ $\frac{20}{30}$ $\frac{8}{12}$ $\frac{66}{100}$

Which two of these fractions are **not** equivalent to $\frac{2}{3}$?

..... and
(2)

(Total 5 marks)

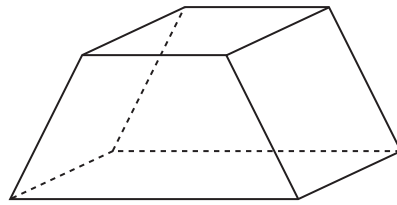
Q5

7

Turn over



6. Here is a diagram of a prism.



Write down the number of

(i) faces

.....

(ii) edges

.....

(iii) vertices

.....

(Total 3 marks)

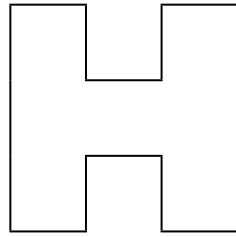
Leave
blank

Q6



Leave blank

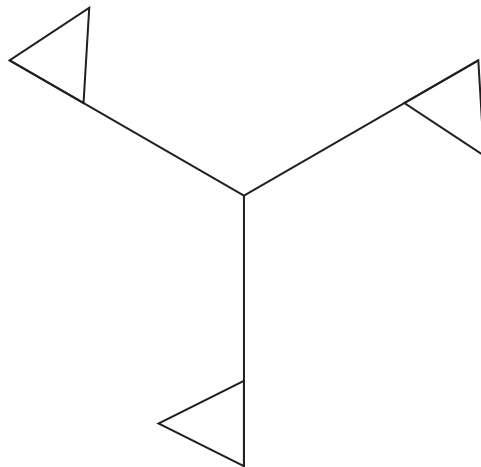
7. (a) On the shape, draw all the lines of symmetry.



(2)

The shape below has rotational symmetry.

(b) Write down the order of rotational symmetry.



(1)

(Total 3 marks)

Q7



Leave blank

8. Here is part of a timetable for a bus.

Blunsdon	07 18	07 45	08 33
Cricklade	07 26	07 53	08 41
Latton	07 31	07 58	08 46
South Cerney	07 38	08 05	08 53
Siddington	07 47	08 14	09 02
Seven Springs	08 26	08 51	09 39
Cheltenham	08 50	09 12	10 00

A bus leaves Blunsdon at 07 45

(a) At what time should the bus arrive at Siddington?

.....
(1)

Peter arrives at the Latton bus stop at 08 35
He waits for the next bus to Seven Springs.

(b) (i) How many minutes should he wait?

..... minutes

(ii) At what time should Peter arrive at Seven Springs?

.....
(2)

Marie gets the bus from Cricklade at 07 26

(c) How many minutes should this bus take to travel from Cricklade to Cheltenham?

..... minutes
(2)

(Total 5 marks)

Q8



Leave
blank

9. (a) Work out $4 \times 3 + 2$

.....
(1)

(b) Work out $20 - 12 \div 4$

.....
(1)

(c) Work out $(18 \div 3) + (20 \div 5)$

.....
(1)

(d) Work out $(3 + 5)^2$

.....
(1)

(Total 4 marks)

Q9



Leave
blank

10. (a) Here is a list of numbers.

3	5	7	8	9	10	12
---	---	---	---	---	----	----

From the list of numbers, write down

(i) a multiple of 6

.....

(ii) a factor of 14

.....

(iii) a square root of 25

.....

(3)

(b) Scott says

‘If you add two different square numbers, you will always get an even number.’

Show that Scott is **wrong**.

(2)

Q10

(Total 5 marks)



Leave
blank

11. $d = 6$

(a) (i) Work out the value of $3 + d$

.....

(ii) Work out the value of $2d$

.....

(2)

$$h = 3f + 4g$$

$$f = 2$$

$$g = -1$$

(b) Work out the value of h

$$h = \text{.....}$$

(2)

Q11

(Total 4 marks)

12. Write down a sensible **metric** unit for each measurement.

(i) The weight of a pair of sunglasses.

.....

(ii) The height of a house.

.....

(iii) The volume of toothpaste in a tube of toothpaste.

.....

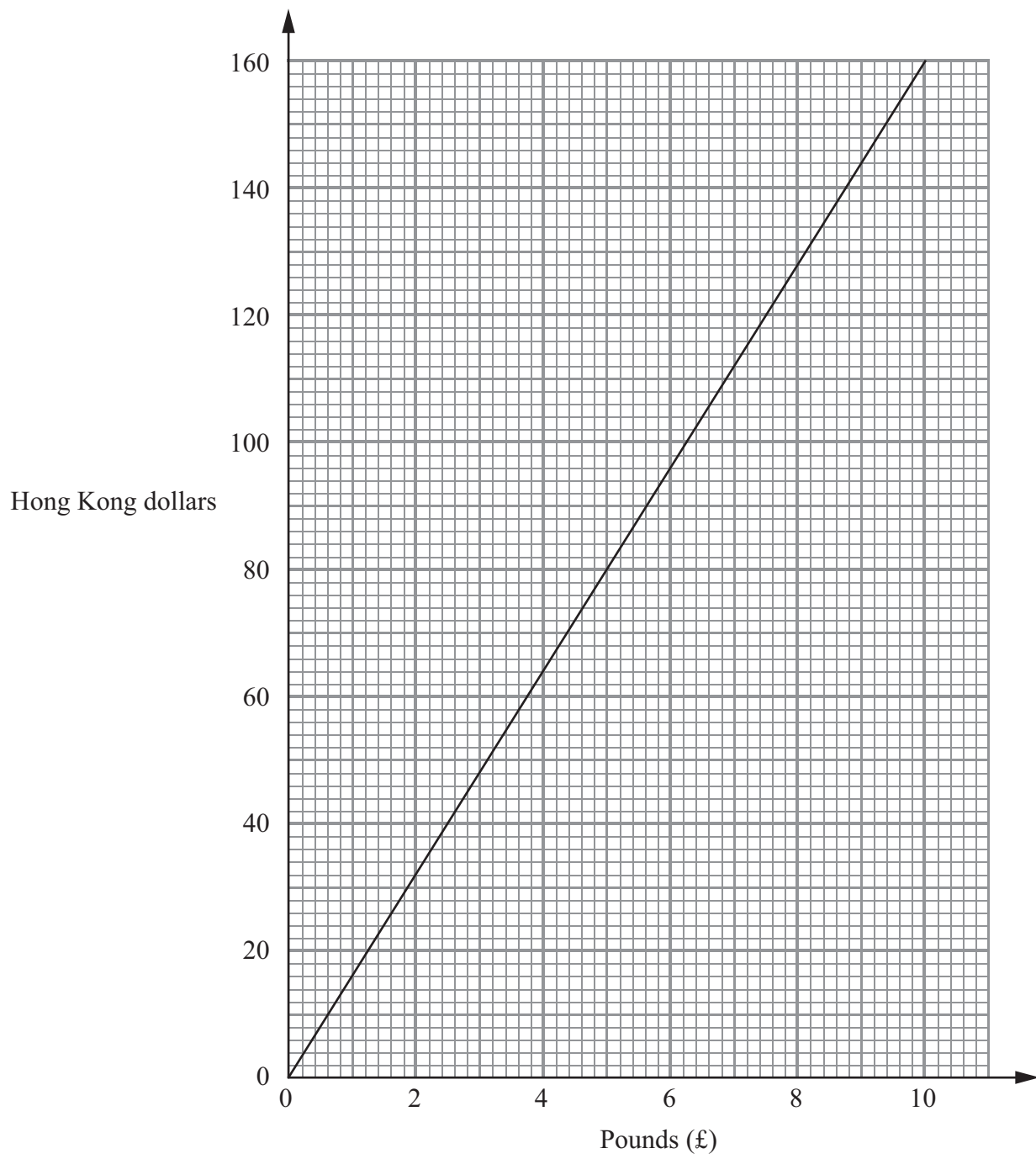
Q12

(Total 3 marks)



Leave blank

13. This graph can be used to change between pounds (£) and Hong Kong dollars.



(a) Use the graph to change £5 to Hong Kong dollars.

..... Hong Kong dollars
(1)

(b) Use the graph to change 120 Hong Kong dollars to pounds.

£
(1)

Q13

(Total 2 marks)



Leave
blank

14. Jasmine is n years old.

Alfie is twice as old as Jasmine.

(a) Write down an expression, in terms of n , for Alfie's age.

.....
(1)

Nimer is 3 years older than Jasmine.

(b) Write down an expression, in terms of n , for Nimer's age.

.....
(1)

(Total 2 marks)

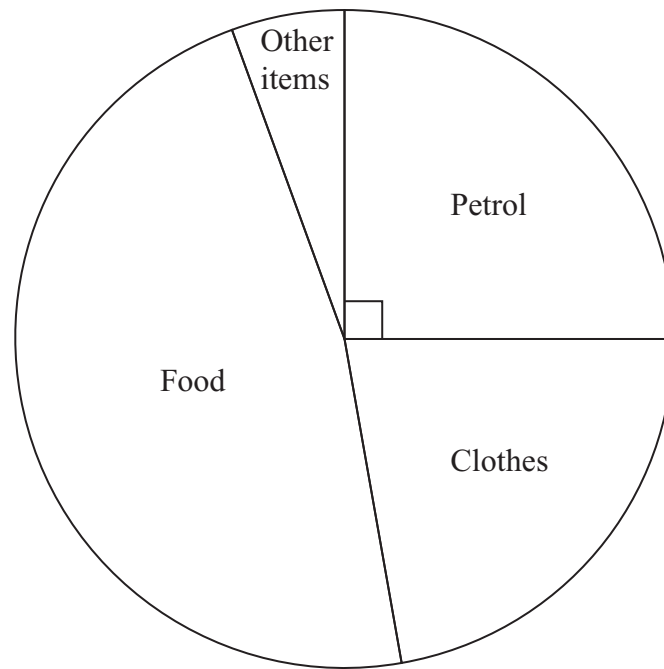
Q14



Leave blank

15. Mrs Yusuf went shopping at a superstore.

The pie chart shows information about the money she spent on petrol, on clothes, on food and on other items.



(a) What did she spend most money on?

.....
(1)

(b) What fraction of the money she spent was on petrol?

.....
(1)

Mrs Yusuf spent £25 on petrol at the superstore.

(c) In total, how much money did she spend?

£.....
(2)

Q15

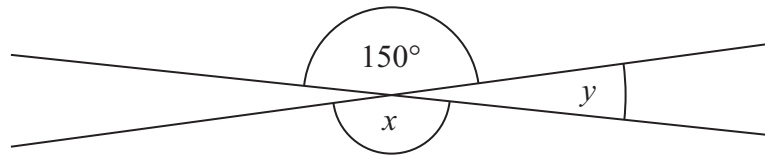
(Total 4 marks)



16.

Diagram **NOT**
accurately drawn

Leave
blank



Fiona says “angle x is 150° ”

Fiona is correct.

(a) Give a reason why.

.....
.....
(1)

Neelan says “angle y is 40° ”

Neelan is wrong.

(b) Explain why.

.....
.....
(1)

(Total 2 marks)

Q16



Leave blank

17. A fair 6-sided dice has coloured faces.

- 3 faces are red.
- 2 faces are blue.
- 1 face is green.

Katie rolls the dice once.

(a) Write down the colour she is **least** likely to get.

.....
(1)

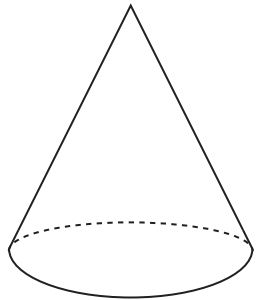
(b) Write down the probability that she gets blue.

.....
(1)

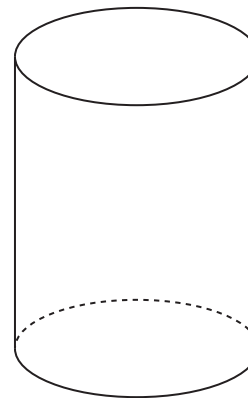
(Total 2 marks)

Q17

18. Write down the mathematical name of each of these solid shapes.



(i)



(ii)

(Total 2 marks)

Q18

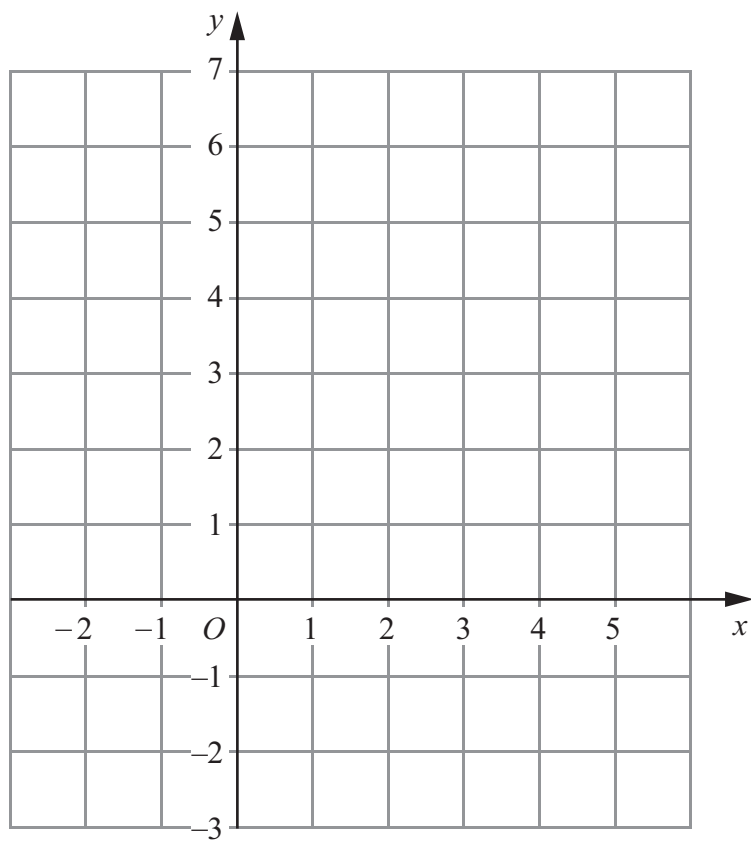


<p>19. Work out an estimate for the value of 27×52.9</p> <p style="text-align: right;">.....</p> <p style="text-align: right;">(Total 2 marks)</p>	<p>Leave blank</p> <p>Q19</p> <input style="width: 20px; height: 20px;" type="text"/>
<p>20. There are 540 workers in a factory.</p> <p>240 of the workers are female.</p> <p>15% of male workers are more than 50 years of age.</p> <p>Work out the number of male workers that are more than 50 years of age.</p> <p style="text-align: right;">.....</p> <p style="text-align: right;">(Total 3 marks)</p>	<p>Q20</p> <input style="width: 20px; height: 20px;" type="text"/>



21. On the grid draw the graph of $x + y = 4$ for values of x from -2 to 5

Leave
blank

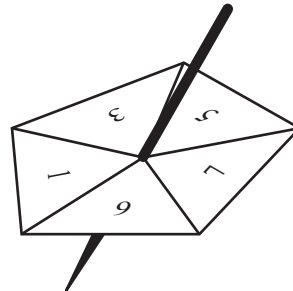
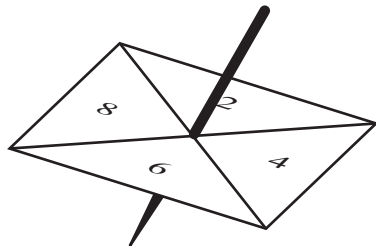


Q21

(Total 3 marks)



22. Louise spins a four-sided spinner and a five-sided spinner.



The four-sided spinner is labelled 2, 4, 6, 8
 The five-sided spinner is labelled 1, 3, 5, 7, 9

Louise adds the score on the four-sided spinner to the score on the five-sided spinner.
 She records the possible total scores in a table.

		4-sided spinner			
		2	4	6	8
5-sided spinner	1	3	5	7	9
	3	5	7	9	11
	5	7	9	11	13
	7	9	11		
	9	11	13		

(a) Complete the table of possible total scores. (1)

(b) Write down all the ways in which Louise can get a total score of 11
 One way has been done for you.
 (2, 9) (2)

Both spinners are fair.

(c) Find the probability that Louise's total score is less than 6
 (2)

(Total 5 marks)

Q22



Leave
blank

23. (a) Work out the value of

(i) the square of 6

.....

(ii) 2^4

.....

(2)

(b) Work out the value of

(i) $-10 \div 5$

.....

(ii) -3×-4

.....

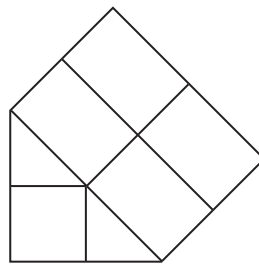
(2)

(Total 4 marks)

Q23

24. Here is a prism.

It is made by cutting a solid cube of side 2 cm in half.



Find the volume of the prism.
State the units with your answer.

.....

(Total 3 marks)

Q24



Leave
blank

25. Chris plays golf.

Here are 15 of his scores.

69	78	82	86	77
83	91	77	92	80
74	81	83	77	72

(a) Draw an ordered stem and leaf diagram to show this information.

You must include a key.



Key:

(3)

(b) Write down the mode.

.....
(1)

Q25

(Total 4 marks)

23

Turn over



26. Work out $\frac{17}{20} - \frac{2}{5}$

Leave
blank

.....
(Total 2 marks)

Q26

27. Use ruler and compasses to **construct** the perpendicular bisector of the line AB .
You must show all your construction lines.

A ————— B

(Total 2 marks)

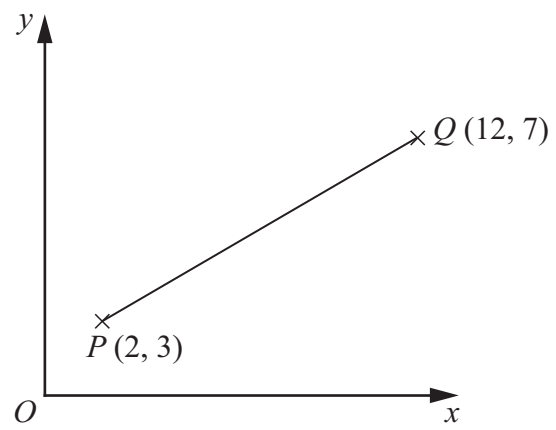
Q27



28.

Leave
blank

Diagram **NOT**
accurately drawn



P is the point with coordinates $(2, 3)$.
 Q is the point with coordinates $(12, 7)$.

Work out the coordinates of the midpoint of the line PQ .

(.....,))

Q28

(Total 2 marks)



29. (a) Expand and simplify $3(x + 5) + 2(5x - 6)$

Leave
blank

.....
(2)

(b) Factorise $5x + 10$

.....
(1)

(c) Factorise $x^2 - 7x$

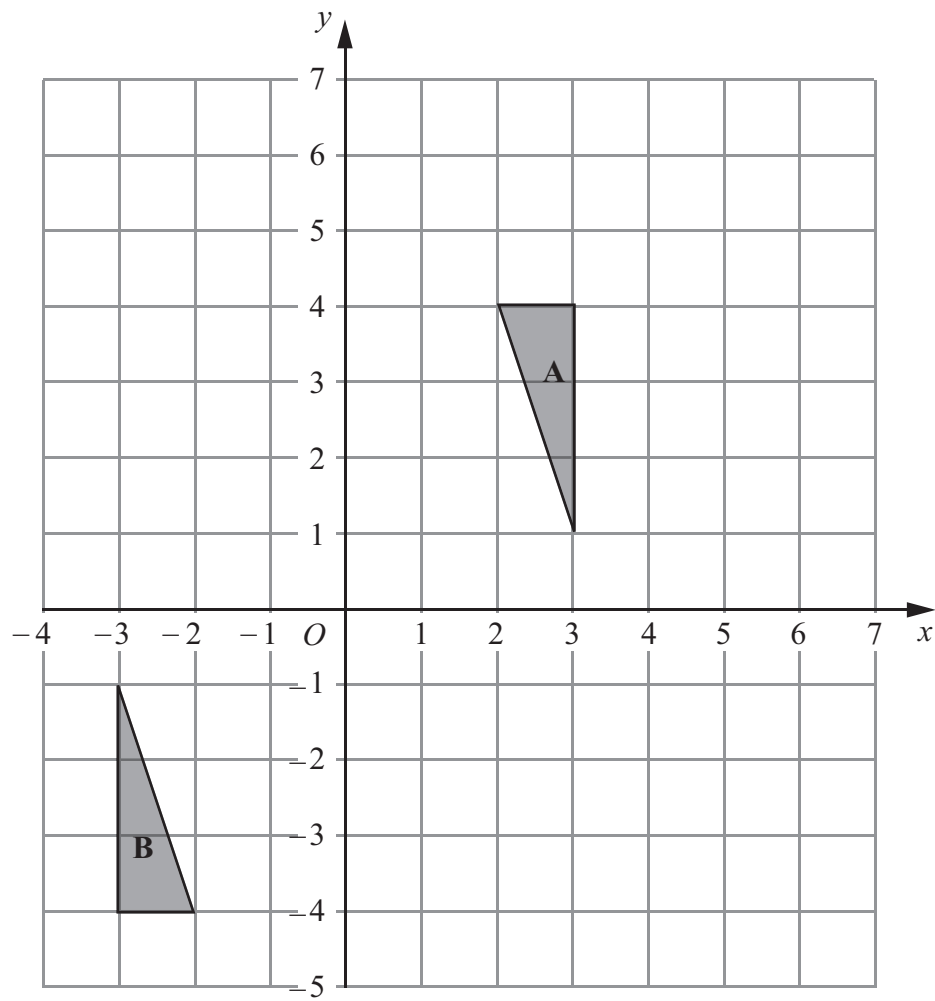
.....
(1)

Q29

(Total 4 marks)



30.



Triangle **A** and triangle **B** are drawn on the grid.

(a) Describe fully the single transformation which maps triangle **A** onto triangle **B**.

.....

(3)

(b) Translate triangle **A** by the vector $\begin{pmatrix} 3 \\ 0 \end{pmatrix}$.

Label the new triangle **C**.

(1)

(Total 4 marks)

Q30



Leave
blank

31. Here are the first five terms of an arithmetic sequence.

2 6 10 14 18

(a) Find, in terms of n , an expression for the n th term of this sequence.

.....
(2)

(b) An expression for the n th term of another sequence is $10 - n^2$

(i) Find the third term of this sequence.

.....

(ii) Find the fifth term of this sequence.

.....
(2)

Q31

(Total 4 marks)

TOTAL FOR PAPER: 100 MARKS

END

